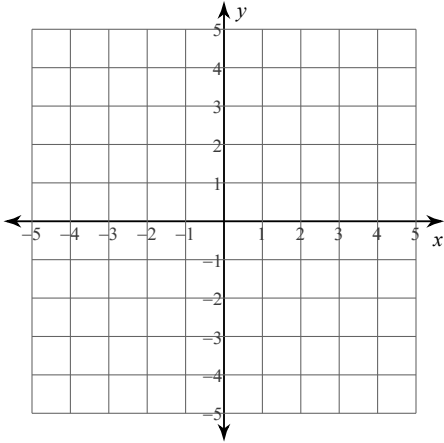


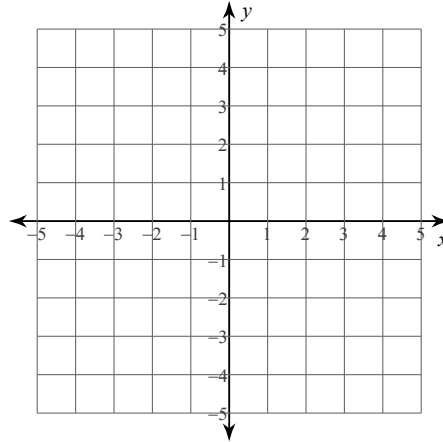
Solve each system by graphing.

1) $y = -\frac{5}{3}x + 3$

$$y = \frac{1}{3}x - 3$$

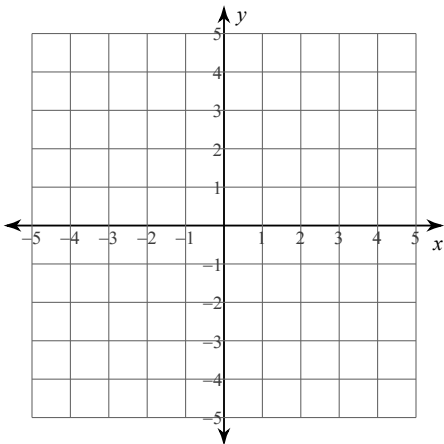


2) $y = 4x + 3$
 $y = -x - 2$

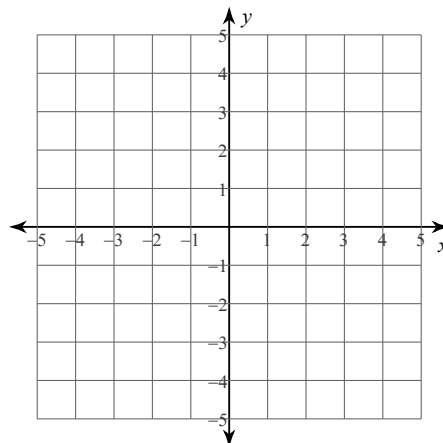


3) $y = -\frac{1}{2}x - 1$

$$y = \frac{1}{4}x - 4$$

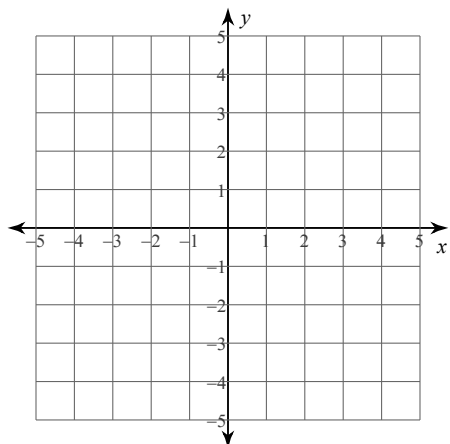


4) $y = -1$
 $y = -\frac{5}{2}x + 4$



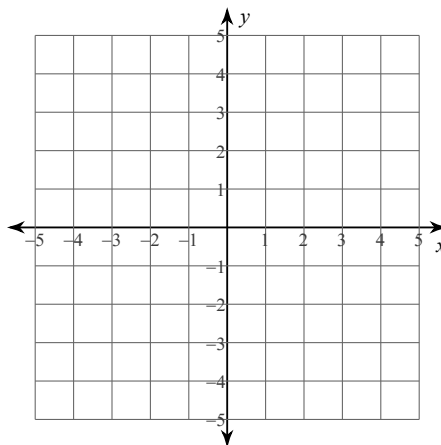
5) $y = 3x - 4$

$y = -\frac{1}{2}x + 3$



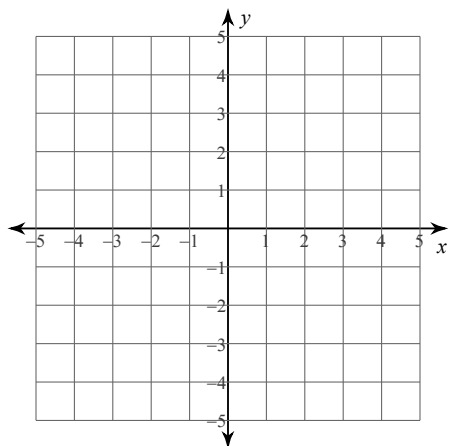
6) $y = -2x + 2$

$y = -2x - 2$



7) $y = -\frac{1}{2}x - 2$

$y = -\frac{3}{2}x + 2$



8) $y = \frac{1}{3}x - 3$

$y = -x + 1$

